



1. Jak rozłożysz 10 kwiatków do wazonów?



$$10 = \square + \square$$




$$10 = \square + \square$$




$$10 = \square + \square$$



$$10 = \square + \square$$




$$10 = \square + \square + \square$$



$$10 = \square + \square + \square$$



$$10 = \square + \square + \square$$



$$10 = \square + \square + \square$$



$$10 = \square + \square + \square + \square + \square$$